

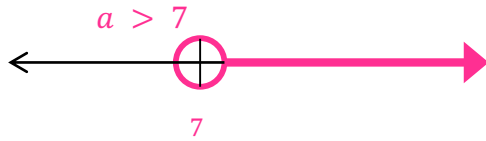
Name: _____

Date: _____ Period _____

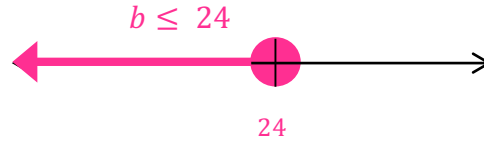
Solving Inequalities – One Step

Solve the inequality and graph the solution on a number line

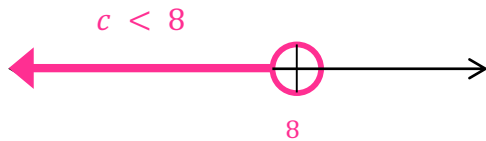
1. $a + 12 > 19$



2. $b - 8 \leq 16$



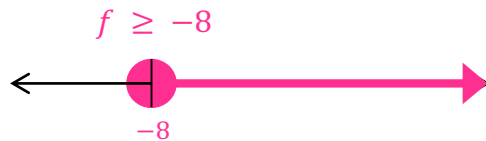
3. $7 + c < 15$



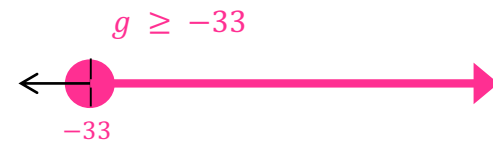
4. $-9 + d \leq 17$



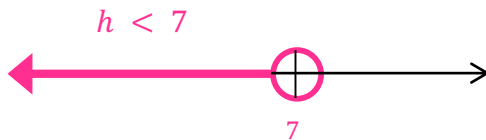
5. $13 + f \geq 5$



6. $g + 20 \geq -13$



7. $9h < 63$




8. $8j > -64$



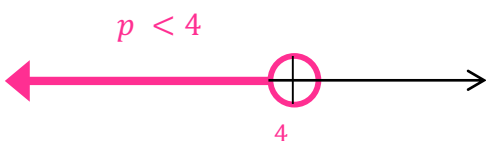
9. $-3k \leq 30$



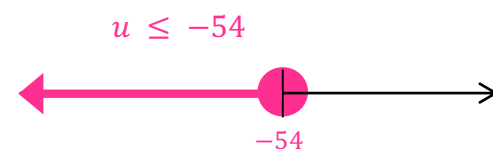
10. $\frac{m}{7} \geq 11$



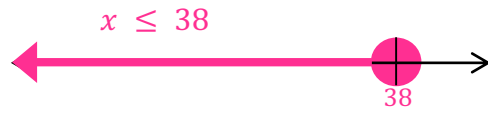
11. $-15p > -60$



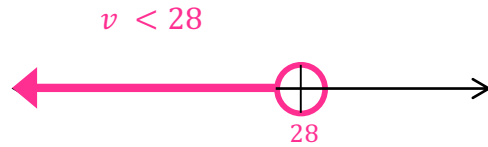
12. $\frac{u}{9} \leq -6$



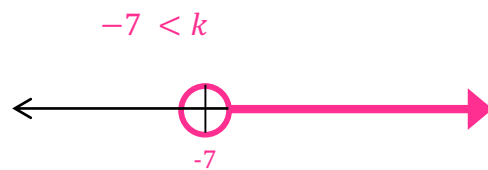
13. $-x \geq -38$



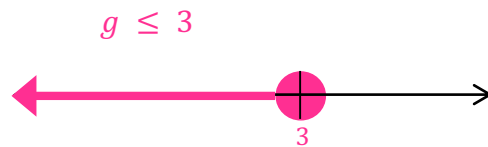
15. $7 > \frac{v}{4}$



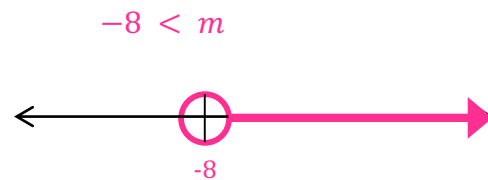
17. $5 < k + 12$



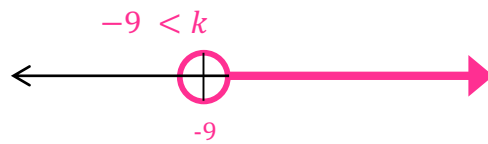
19. $-g \geq -3$



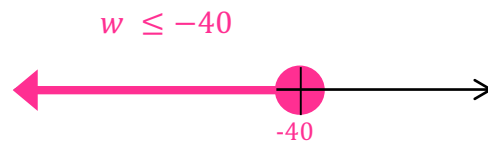
21. $-16 < 2m$



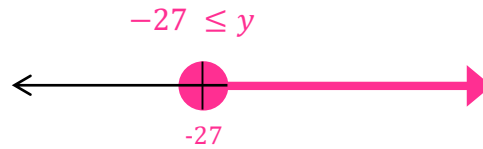
23. $-13 + k > -22$



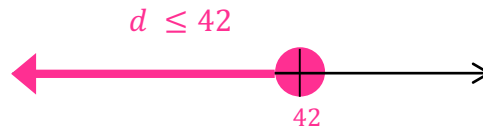
25. $\frac{w}{-5} \geq 8$



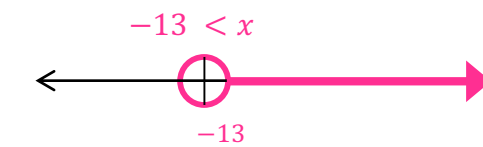
14. $-y \leq 27$



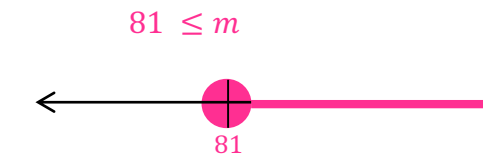
16. $-6 \leq \frac{d}{-7}$



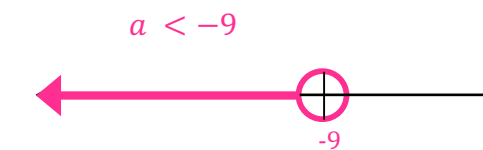
18. $-8 < x + 5$



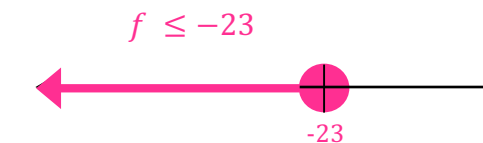
20. $-\frac{m}{9} \leq -9$



22. $-4a > 36$



24. $f + 18 \leq -5$



26. $\frac{y}{-6} > 4$

