

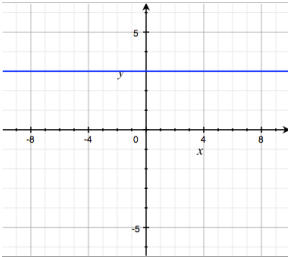
Name: _____

Date: _____

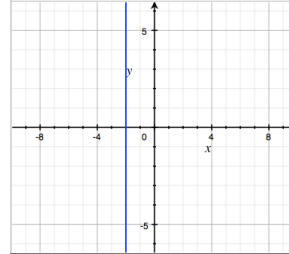
Slope of Vertical and Horizontal Lines

Section I. Determine the slope of the line using the graph of the line.

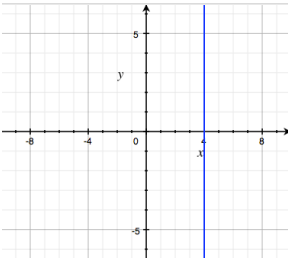
1.



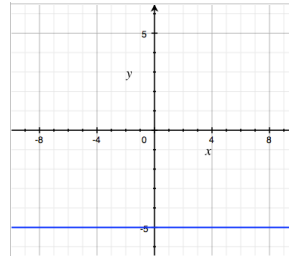
2.



3.



4.



Section II. Determine the slope of the line given the linear equation.

5. $y = 3$

6. $x = -7$

7. $x = 9$

8. $y = -4$

Section III. Determine the slope of the line given two coordinates.

9. $(-4, 2)$ and $(-4, -3)$

10. $(5, 6)$ and $(-2, 6)$

11. $(5, 0)$ and $(5, 12)$

12. $(-4, -2)$ and $(9, -2)$